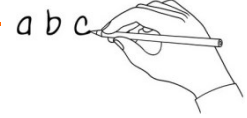




How to tell the time

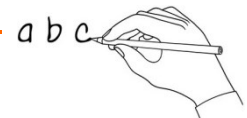


1. What's the word?

Write the word under the pictures.

~~pizza~~ five o'clock quarter past five half past five quarter to six five past six
 twenty past six twenty-five past six twenty-five to seven twenty to seven ten to seven five to seven

	pizza				



2. Fill it in!

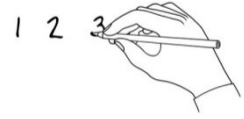
Watch the video. Write the missing words in the sentences.

o'clock	time	quarter past	hours	minutes	fives	quarter to	half past
---------	-----------------	--------------	-------	---------	-------	------------	-----------

- Emily is learning how to tell the time.
- The little hand shows us the _____.
- The big hand shows us the _____.
- When the big hand is pointing to the twelve, we say it's _____.
- When the big hand is pointing to the three, we say it's _____.
- When the big hand is pointing to the six, we say it's _____.
- When the big hand is pointing to the nine, we say it's _____.
- For other times, we count the minutes in _____.



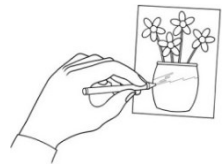
3. What's the order?



Watch the video. Put the sentences in the correct order.

- | | |
|---|----------------------------|
| | It's quarter past five. |
| | It's twenty past six. |
| 1 | It's five o'clock. |
| | It's ten to seven. |
| | It's twenty-five to seven. |
| | It's quarter to six. |
| | It's five past six. |
| | It's half past five. |

4. Write and draw!



What's your favourite time of day? Write about it and draw a picture!

.....

.....

.....

.....

.....